

Name: \_\_\_\_\_ Date: \_\_\_\_\_

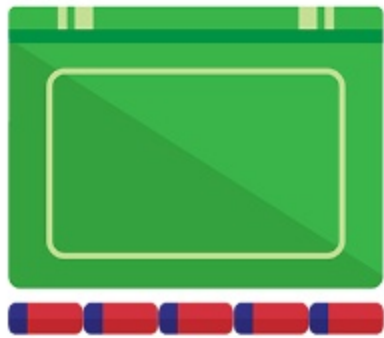
Teacher/Period: \_\_\_\_\_ Final Grade: \_\_\_\_\_ / 100

## Measuring Length of School Supplies

Question 1 (Short Answer)

\_\_\_\_\_ / 10

How long is the book in terms of erasers?



Answer:

\_\_\_\_\_

Question 2 (Short Answer)

\_\_\_\_\_ / 10

How many markers would it take to span the length of the notebook?



Answer:

\_\_\_\_\_

Question 3 (Short Answer)

\_\_\_\_\_ / 10

How many colored pencils long is the backpack?



Answer:

\_\_\_\_\_

Question 4 (Short Answer)

\_\_\_\_\_ / 10

How many pencil sharpeners long is the calculator?



Answer:

\_\_\_\_\_

Question 5 (Short Answer)

\_\_\_\_\_ / 10

How many backpacks does it take to span the length of the table?



Answer:

\_\_\_\_\_

Question 6 (Short Answer)

\_\_\_\_\_ / 10

How long is the marker in terms of erasers?




Answer:

\_\_\_\_\_

Question 7 (Short Answer)

\_\_\_\_\_ / 10

How many notebooks would it take to measure the length of the chair?



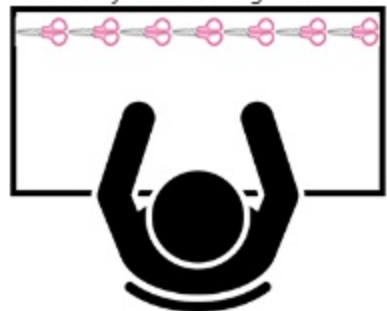
Answer:

\_\_\_\_\_

Question 10 (Short Answer)

\_\_\_\_\_ / 10

How many scissors long is a desk?



Answer:

\_\_\_\_\_

Question 8 (Short Answer)

\_\_\_\_\_ / 10

How many mini colored pencils long is the paint set?



Answer:

\_\_\_\_\_

Question 9 (Short Answer)

\_\_\_\_\_ / 10

How many paperclips long is the computer?



Answer:

\_\_\_\_\_

# Answer Key for Measuring Length of School Supplies

1: 5

2: 2

3: 3

4: 4

5: 6

6: 2

7: 3

8: 8

9: 5

10: 7