


Name: _____ Date: _____

Teacher/Period: _____ Final Grade: _____ / 50

Name That Shape!

Question 1 (Multiple Choice)
_____ / 10

What shape is this?



- A. square
- B. rectangle
- C. triangle

Question 2 (Multiple Choice)
_____ / 10


What shape is this?



- A. square
- B. triangle
- C. circle

Question 3 (Multiple Choice)
_____ / 10

What shape is this?



- A. square
- B. triangle
- C. circle

Question 4 (Multiple Choice)
_____ / 10


What shape is this?



- A. rectangle
- B. circle

Question 5 (Multiple Choice)
_____ / 10

What shape is this?



- A. circle
- B. square
- C. diamond

Answer Key for Name That Shape!

1: square

2: circle

3: triangle

4: rectangle

5: diamond