

Name: _____ Date: _____


Teacher/Period: _____ Final Grade: _____ / 50

Measuring Weight

Question 1 (Multiple Choice)

_____ / 10

Select the animal that is heavier.



A. pig

B. bee

Question 2 (Multiple Choice)

_____ / 10

Select the animal that is heavier.




A. caterpillar

B. bear

Question 3 (Multiple Choice)

_____ / 10

Select the animal that is heavier.




A. fish

B. horse

Question 4 (Multiple Choice)

_____ / 10

Select the animal that is heavier.




A. snail

B. cow

Question 5 (Multiple Choice)

_____ / 10

Select the animal that is heavier.



A. fox

B. lizard

Answer Key for Measuring Weight

1: pig

2: bear

3: horse

4: cow

5: fox