





Name: _____ Date: _____

Teacher/Period: _____ Final Grade: _____ / 25

Preschool Shapes

Question 1 (Multiple Choice)
____ / 5

Which shape is the circle?

- A. 
- B. 
- C. 
- D. 

- A. A
- B. B
- C. C
- D. D

Question 2 (Multiple Choice)
____ / 5


What is this shape?



- A. square
- B. circle
- C. rectangle
- D. triangle

Question 3 (True/False)
____ / 5

This is a square.



- A. True
- B. False

Question 4 (Short Answer)
____ / 5

What is this shape?



Answer:

Question 5 (Multiple Choice)
____ / 5

How many circles are there?



- A. 1
- B. 2
- C. 3
- D. 4

Answer Key for Preschool Shapes

1: C

2: circle

3: true

4: triangle

5: 3