

Name: _____ Date: _____

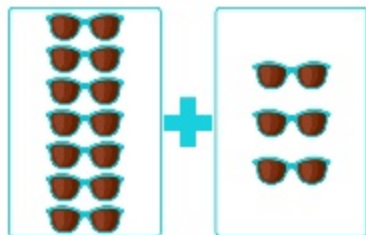
Teacher/Period: _____ Final Grade: _____ / 50

Matching Addition

Question 1 (Multiple Choice)

_____ / 10

Select the problem below that matches this image and solve the problem.

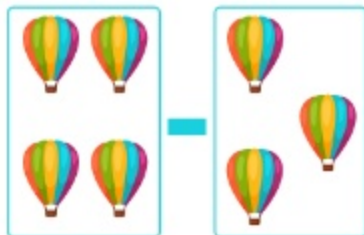


- A. $7+3=10$
- B. $6-3=3$
- C. $7+3=11$
- D. $6+2=8$

Question 2 (Multiple Choice)

_____ / 10

Select the problem below that matches this image and solve the problem.




- A. $5-3=1$
- B. $4-3=2$
- C. $6-3=3$
- D. $4-3=1$

Question 3 (Multiple Choice)

_____ / 10

Select the problem below that matches this image and solve the problem.

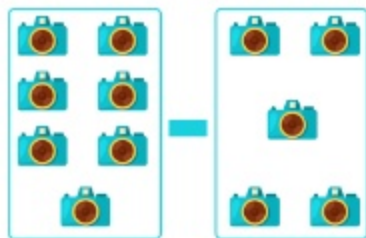


- A. $8+0=8$
- B. $8+1=9$
- C. $7+1=8$
- D. $6+2=9$

Question 4 (Multiple Choice)

_____ / 10

Select the problem below that matches this image and solve the problem.




- A. $6-4=2$
- B. $7-4=3$
- C. $7-5=2$
- D. $8-5=3$

Question 5 (Multiple Choice)

_____ / 10

Select the problem below that matches this image and solve the problem.



- A. $5+1=3$
- B. $5-4=1$
- C. $5-5=0$
- D. $5-2=3$

Answer Key for Matching Addition

1: $7+3=10$

2: $4-3=1$

3: $8+1=9$

4: $7-5=2$

5: $5-4=1$