

Name: _____ Date: _____


Teacher/Period: _____ Final Grade: _____ / 50

Addition Up to 10 Animals

Question 1 (Short Answer)

_____ / 10

What is $3 + 5 = ?$




Answer:

Question 2 (Short Answer)

_____ / 10

What is $0 + 1 = ?$




Answer:

Question 3 (Multiple Choice)

_____ / 10

What is $2 + 4 = ?$



A. 7

B. 8


C. 5

D. 6

Question 4 (Multiple Choice)

_____ / 10

What is $7 + 2 = ?$



A. 8

B. 10

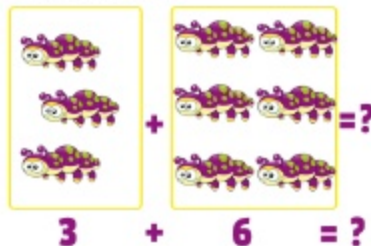
C. 9

D. 7

Question 5 (Short Answer)

_____ / 10

What is $3 + 6 = ?$



Answer:

Answer Key for Addition Up to 10 Animals

1: 8

2: 1

3: 6

4: 9

5: 9